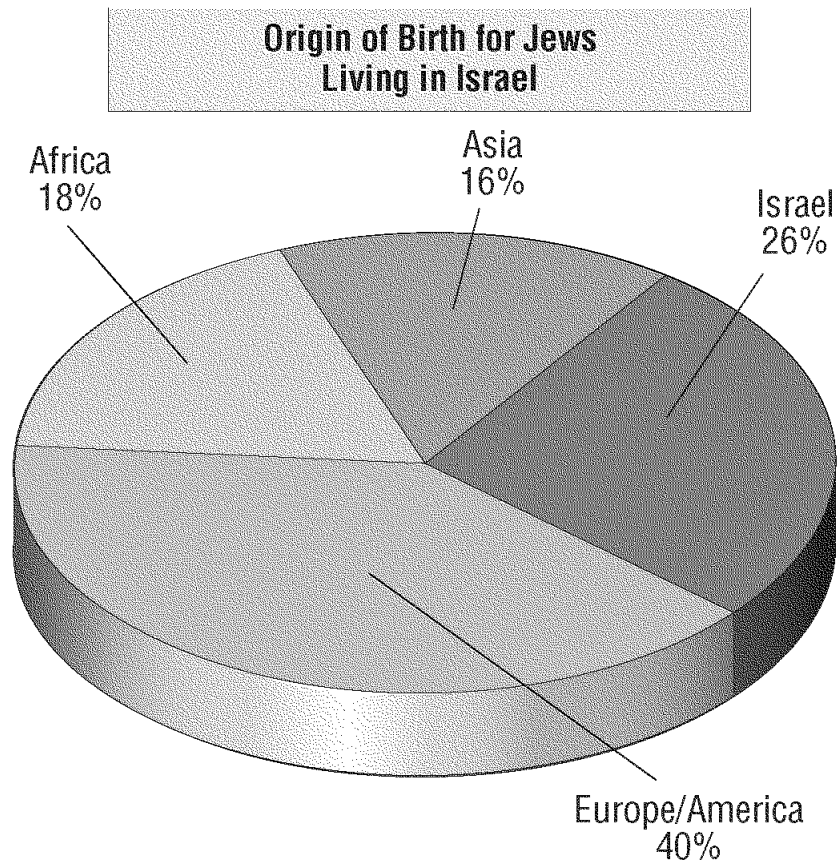





Chapter 12 Geography Study Guide

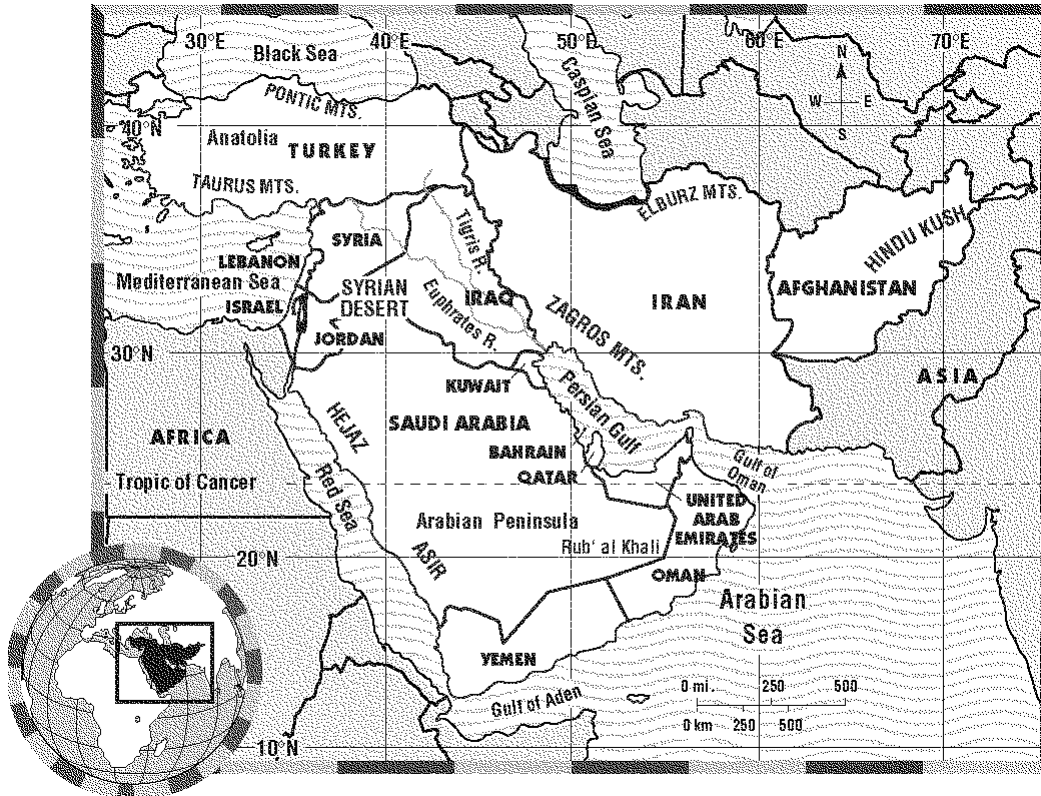
Multiple Choice




Identify the letter of the choice that best completes the statement or answers the question.

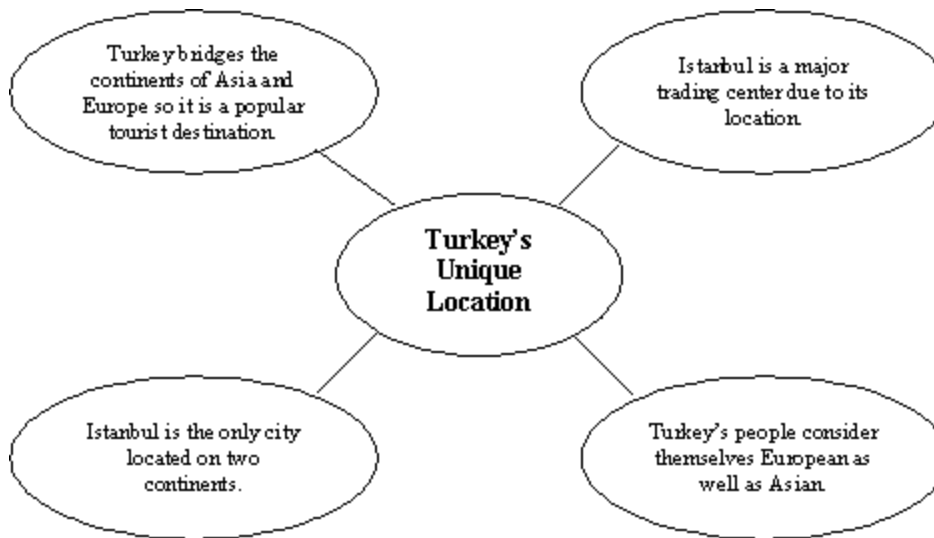
- ____ 1. What nation of Southwest Asia has land in both Asia and Europe?
 - a. Iran
 - b. Israel
 - c. Turkey
 - d. Afghanistan
- ____ 2. What Arab country endured a civil war from 1975 to 1991?
 - a. Iraq
 - b. Lebanon
 - c. Saudi Arabia
 - d. Turkey
- ____ 3. The largest desert in Saudi Arabia is the _____.
 - a. Negev
 - b. Rub' al Khali
 - c. Fertile Crescent
 - d. Qatar
- ____ 4. The Hindu Kush cover most of _____.
 - a. Afghanistan
 - b. Iran
 - c. Turkey
 - d. Iraq
- ____ 5. The most industrialized country in Southwest Asia is _____.
 - a. Turkey
 - b. Iraq
 - c. Israel
 - d. Iran
- ____ 6. The Law of Return brought an increase in Israel's _____.
 - a. Jewish population
 - b. military power
 - c. mining industries
 - d. Arab population
- ____ 7. Saudi Arabia is the largest country in _____.
 - a. Southwest Asia
 - b. Asia
 - c. Mesopotamia
 - d. the Fertile Crescent
- ____ 8. Istanbul was once called _____.
 - a. Anatolia
 - b. Constantinople
 - c. Baghdad
 - d. Ankara
- ____ 9. Damascus was founded more than 4,000 years ago as a _____.
 - a. banking capital
 - b. seaport
 - c. trading center
 - d. oil drilling city
- ____ 10. Istanbul is the only city in the world located on two _____.
 - a. oceans
 - b. peninsulas
 - c. mountain ranges
 - d. continents





- ___ 11.  Most Jews living in Israel today were born in ____.
- | | |
|-----------|-----------------------|
| a. Africa | c. Europe and America |
| b. Asia | d. Israel |
- ___ 12.  Approximately 18 percent of Jews currently living in Israel came there from ____.
- | | |
|-----------|------------|
| a. Africa | c. Europe |
| b. Asia | d. America |
- ___ 13.  What percentage of Jews currently living in Israel were born in Asia?
- | | |
|---------------|---------------|
| a. 16 percent | c. 27 percent |
| b. 40 percent | d. 18 percent |




14.  The Elburz Mountains are in the northern portion of ____.
- | | |
|-------------------------|----------|
| a. United Arab Emirates | c. Syria |
| b. Yemen | d. Iran |
15.  The body of water south of Yemen is the ____.
- | | |
|-----------------|-----------------|
| a. Persian Gulf | c. Gulf of Aden |
| b. Red Sea | d. Gulf of Oman |
16.  The Zagros Mountains are in ____.
- | | |
|-------------|----------------|
| a. Oman | c. Iran |
| b. Anatolia | d. Afghanistan |




17.  Istanbul is a major trading center because of its ____.
- a. size
 - b. location
 - c. ethnic makeup
 - d. wealth


18.  Turkey's people consider themselves to be ____.
- a. European and Asian
 - b. Slavic and Asian
 - c. Slavic and American
 - d. American and Asian


"We offer peace and unity to all the neighboring states and their peoples, and invite them to cooperate with the independent Jewish nation for the common good of all."
 from *Declaration of Israel's Independence*, issued at Tel Aviv on May 14, 1948

19.  According to the excerpt, what is Israel offering to its neighbors?
- a. prosperity
 - b. free trade
 - c. peace and unity
 - d. united government

20.  When was this declaration issued?
- a. 1948
 - b. 2004
 - c. 1990
 - d. 1966


"I . . . would like to strengthen the peace, good neighborly relations, and normalization with Egypt and Jordan, and to strive towards real peace with the Arab countries, primarily Syria and Lebanon. The Government under my leadership will be committed to do all that is possible in order to restore security and stability. But we are not misleading ourselves or the public as to the difficult days that still lie ahead. We will all need to muster the stamina and mobilize the steadfast national will which characterizes our people."
 Israeli Prime Minister Ariel Sharon, Inaugural Speech


- _____ 21.  One of Sharon's goals was to _____.
a. open trade routes throughout Southwest Asia
b. focus on lowering the national debt
c. build the military
d. strengthen the peace with Israel's neighbors

- _____ 22.  How did Sharon feel about the work ahead of him?
a. It would be easy to accomplish.
b. It would be difficult.
c. Everyone would cooperate with his wishes.
d. He could count on the help of his neighbors.

“Closing the gap between the developed and developing world both in economic and political terms will be the greatest guarantee of world peace. To attain this long-term goal [we must have] a better understanding of and dialogue between different civilizations. We must rid ourselves of prejudices. . . . For Moslem countries to be better understood in the West a more objective approach towards Islam should be adopted. It should be clearly seen that those who commit violence in the name of Islam do not represent this faith in any way.”

Recep Tayyip Erdogan, Prime Minister of Turkey

- _____ 23.  According to Erdogan, closing the economic and political gap between developed and developing nations will be the greatest guarantee of _____.
a. better schools
b. better government
c. world trade
d. world peace

- _____ 24.  To whom is Erdogan most likely speaking?
a. fellow Muslims
b. people from the West
c. Israelis
d. other Europeans

Chapter 12 Geography Study Guide

Answer Section

MULTIPLE CHOICE

1. ANS: C	DIF: Average	REF: 336	STO: GEOG7.EGPS5
2. ANS: B	DIF: Average	REF: 339	
3. ANS: B	DIF: Average	REF: 347	STO: GEOG7.EGPS5
4. ANS: A	DIF: Average	REF: 354	STO: GEOG7.EGPS5
5. ANS: C	DIF: Average	REF: 344	STO: GEOG7.EGPS5
6. ANS: A	DIF: Easy	REF: 346	STO: GEOG7.EGPS5
7. ANS: A	DIF: Easy	REF: 347	STO: GEOG7.EGPS5
8. ANS: B	DIF: Easy	REF: 338	STO: GEOG7.EGPS5
9. ANS: C	DIF: Average	REF: 339	STO: GEOG7.EGPS5
10. ANS: D	DIF: Average	REF: 338	STO: GEOG7.EGPS5
11. ANS: C	DIF: Average	REF: 346	STO: GEOG7.EGPS5
MSC: Document Based Question			
12. ANS: A	DIF: Average	REF: 346	STO: GEOG7.EGPS5
MSC: Document Based Question			
13. ANS: A	DIF: Average	REF: 346	STO: GEOG7.EGPS5
MSC: Document Based Question			
14. ANS: D	DIF: Average	REF: 337	STO: GEOG7.EGPS1a
MSC: Document Based Question			
15. ANS: C	DIF: Easy	REF: 337	STO: GEOG7.EGPS1a
MSC: Document Based Question			
16. ANS: C	DIF: Average	REF: 337	STO: GEOG7.EGPS1a
MSC: Document Based Question			
17. ANS: B	DIF: Average	REF: 338	STO: GEOG7.EGPS1c
MSC: Document Based Question			
18. ANS: A	DIF: Average	REF: 338	STO: GEOG7.EGPS5
MSC: Document Based Question			
19. ANS: C	DIF: Average	REF: 354	STO: GEOG7.EGPS1c, GEOG7.EGPS5
MSC: Document Based Question			
20. ANS: A	DIF: Average	REF: 354	MSC: Document Based Question
21. ANS: D	DIF: Easy	REF: 337	STO: GEOG7.EGPS1c
MSC: Document Based Question			
22. ANS: B	DIF: Easy	REF: 337	STO: GEOG7.EGPS1c
MSC: Document Based Question			
23. ANS: D	DIF: Easy	REF: 337	STO: GEOG7.EGPS6
MSC: Document Based Question			
24. ANS: A	DIF: Average	REF: 337	STO: GEOG7.EGPS5, GEOG7.EGPS6
MSC: Document Based Question			